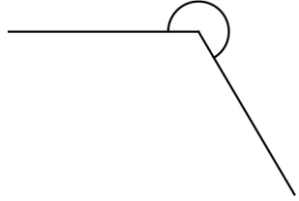
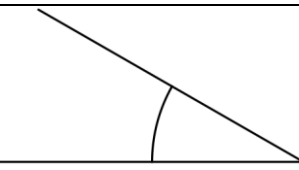

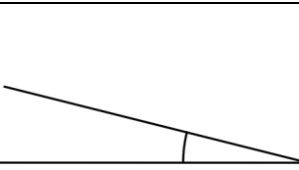
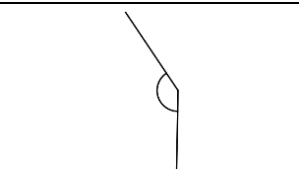
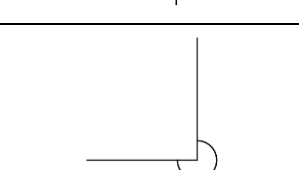

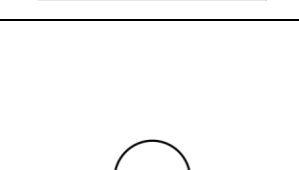

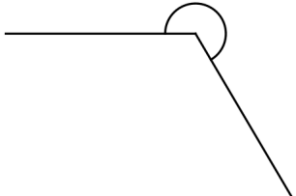
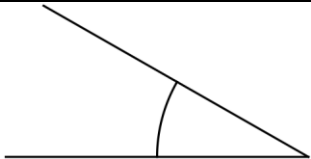

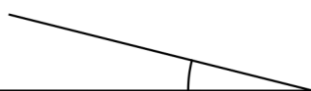

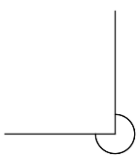
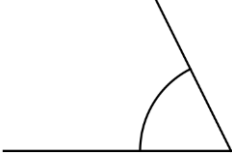



אומדן של זוויות

אימדו את גודלה של כל זווית מבין האפשרויות:

240° . ב.	45° . א.		(1)
310° . ד.	100° . ג.		(2)
90° . ב.	30° . א.		(3)
90° . ד.	120° . ג.		(4)
15° . ב.	90° . א.		(5)
200° . ד.	145° . ג.		(6)
180° . ב.	90° . א.		(7)
90° . ב.	200° . א.		(8)
5° . ד.	60° . ג.		
100° . ב.	180° . א.		
10° . ד.	170° . ג.		

תשובות:

240° .ב.	45° .א.		(1)
310° .ד.	100° .ג.		(2)
90° .ב.	30° .א.		(3)
210° .ד.	100° .ג.		(4)
70° .ב.	270° .א.		(5)
90° .ד.	120° .ג.		(6)
15° .ב.	90° .א.		(7)
80° .ד.	180° .ג.		(8)