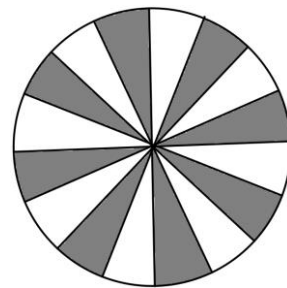
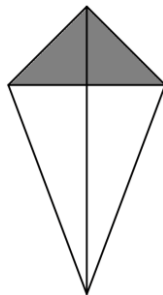

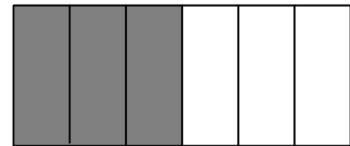
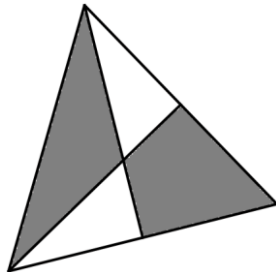



1. הקיפו את הצורות בהן החלק המושחר שווה ל- $\frac{1}{2}$ :



2. צבעו חלק השווה ל- $\frac{1}{4}$ :



3. צבעו חלק השווה ל- $\frac{1}{2}$ :

