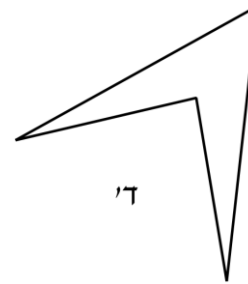
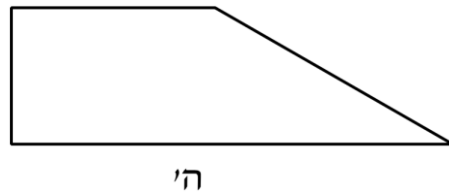
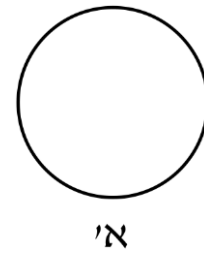
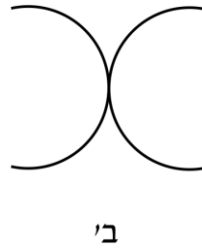
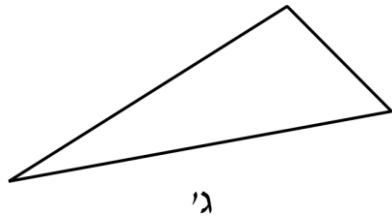
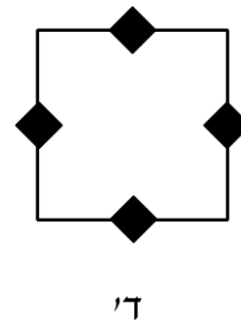
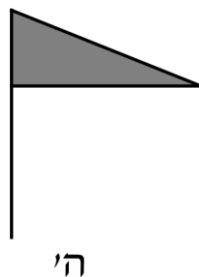

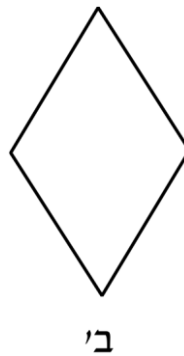
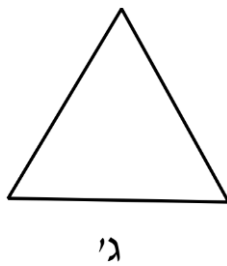


1. לאילו מהצורות הבאות יש סימטריה שיקופית? _____

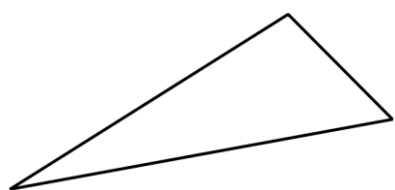


2. לאילו מהצורות הבאות יש סימטריה סיבובית? _____

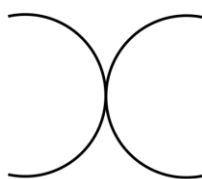


תשובות

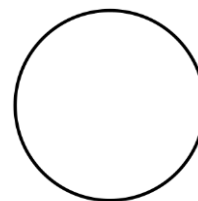
1. לאילו מהצורות הבאות יש סימטריה שיקופית? א', ב', ד'.



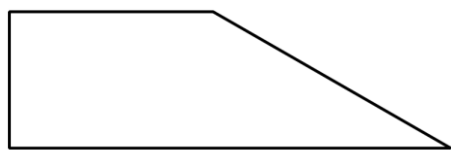
ג'



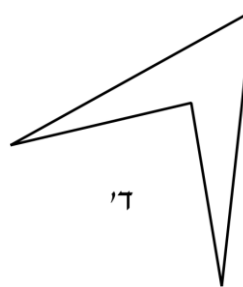
ב'



א'

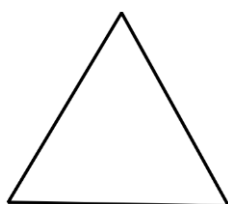


ה'

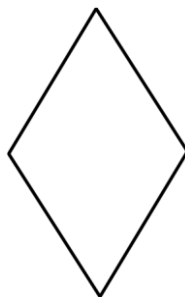


ד'

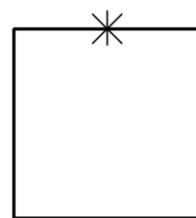
2. לאילו מהצורות הבאות יש סימטריה סיבובית? ב', ג', ד'.



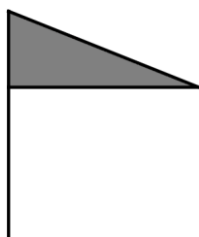
ג'



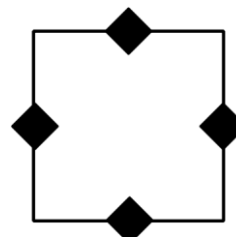
ב'



א'



ה'



ד'